

**Geography**  
**Higher level and standard level**  
**Paper 2 – resources booklet**

Thursday 17 November 2016 (morning)

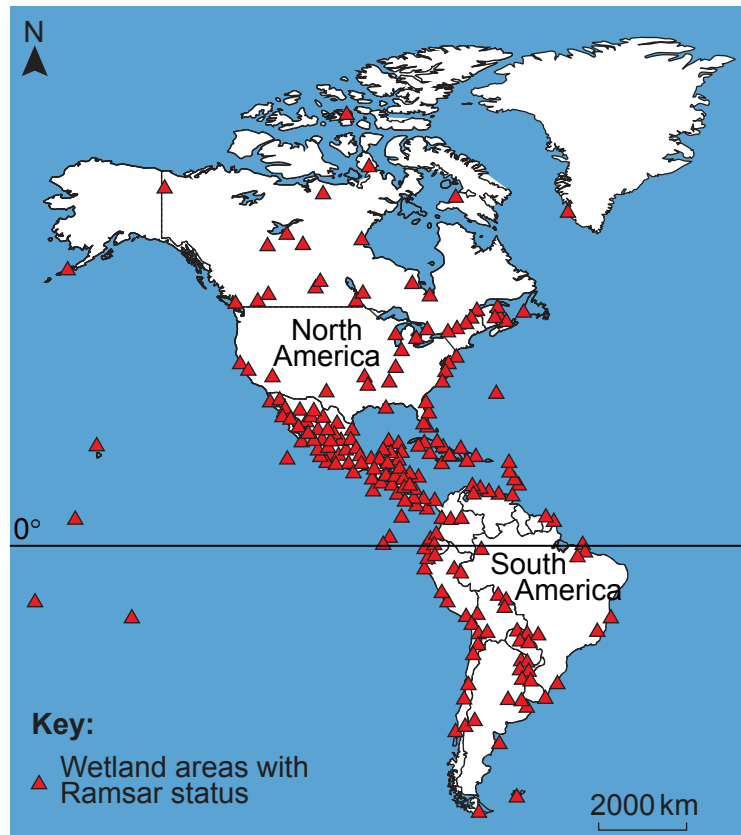
---

**Instructions to candidates**

- Do not open this resources booklet until instructed to do so.
- Use the resources as appropriate to the questions in paper 2.

**Option A — Freshwater – issues and conflicts**

2. The map shows the distribution of wetland areas in the Americas that have been given Ramsar status. The Ramsar Convention is the convention on wetlands of international importance.



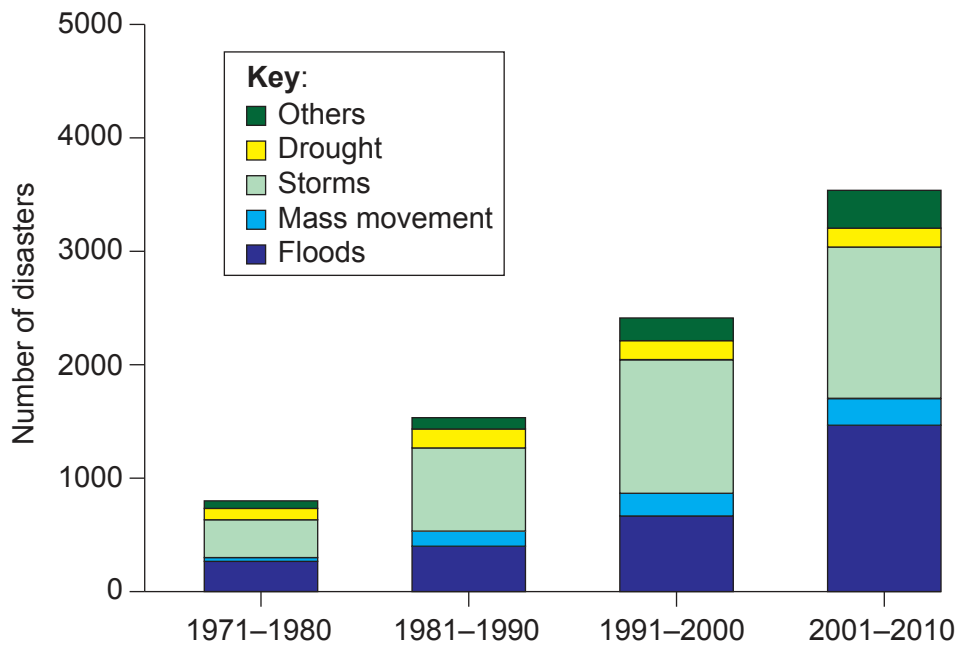
[Source: adapted from www.gislounge.com]

**Option D — Hazards and disasters – risk assessment and response**

8. Diagram A shows the number of reported disasters by decade by hazard type, globally. Diagram B shows economic losses by hazard type, globally.

**Diagram A**

**Number of reported disasters by decade by hazard type globally (1971–2010)**

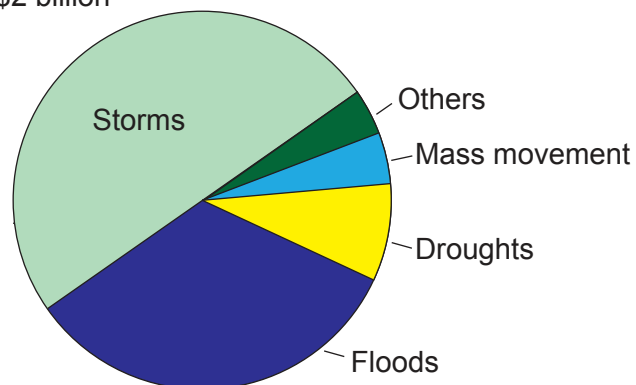


[Source: From Atlas of Mortality and Economic Losses from Weather Climate and Water Extremes ([http://library.wmo.int/pmb\\_ged/wmo\\_1123\\_en.pdf](http://library.wmo.int/pmb_ged/wmo_1123_en.pdf)), ©2014 World Meteorological Organization.]

**Diagram B**

**Economic losses by hazard type, globally (1971–2010)**

Total US\$2 billion



[Source: From Atlas of Mortality and Economic Losses from Weather Climate and Water Extremes ([http://library.wmo.int/pmb\\_ged/wmo\\_1123\\_en.pdf](http://library.wmo.int/pmb_ged/wmo_1123_en.pdf)), ©2014 World Meteorological Organization.]

**Turn over**

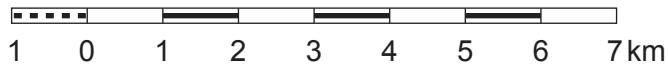
Option E — Leisure, sport and tourism








































- 10. The map shows the area around the valley of the River Tarn and the town of Sainte-Enimie in Southern France. The scale is 1:100 000 and the contour interval is 40 metres. Photograph A shows the town of Sainte-Enimie.



SCAN 100®, © IGN – 2016. No copy. Authorization No. 60.16021

Scale 1:100 000



Key:			
Boundary of National Park _____		Youth centre, holiday park _____	
Boundary of the surrounding area _____		Equestrian centre, equestrian centre with accommodation _____	
National Park Information Centre _____		Minor roads: 7 metres and wider, less than 7 metres _____	
GR footpath _____		Distances in kilometres (as total between important towns) _____	
Local walking trail: starting point _____		Other roads: regularly maintained, unmaintained _____	
Bridle way _____		Agricultural track/forestry track, path, mule path _____	
Tourist trail _____		Crossing level, tunnel, bridge _____	
Temple, church, chapel, abbey _____		Canals: navigable, non-navigable _____	
Castle, castle open to public, museum _____		Lock, station, port, tunnel, reservoir, water tower _____	
Tower, rampart, historic bridge _____		Lakes or ponds: permanent, seasonal, marshland _____	
Traditional architecture, building of interest _____		House or group of houses, lodge _____	
Belfry, watchtower _____		Church, chapel, wayside cross _____	
Dolmen, menhir _____		Monuments: megalithic, commemorative, cemetery _____	
Converted cave, sinkhole _____		Castle, tower, ruins _____	
Ruin, remains _____		Fortifications: fort, battery _____	
Point of interest, Order of Knights of Malta site _____		Aerodromes: with facilities, without facilities _____	
Viewpoint indicator, view point _____		Population in thousands of inhabitants _____	
Spring, waterfall _____		Wood, scrubland _____	
Tourist information, police station _____		The contour interval is 40 metres. Arrow points in direction of decreased elevation.	
Hostel / guarded refuge, unguarded refuge / shelter _____			
Stables, camping _____			

[Source: produced and edited by the French National Geographical Institute in collaboration with the National Park Of Cevennes]

### Photograph A



[Source: copyright International Baccalaureate Organization, 2016]